

Find and Count Ocean and Create a Bar Graph Activity

Created by Deirdre Smith of JDaniel4's Mom
Clip Art from

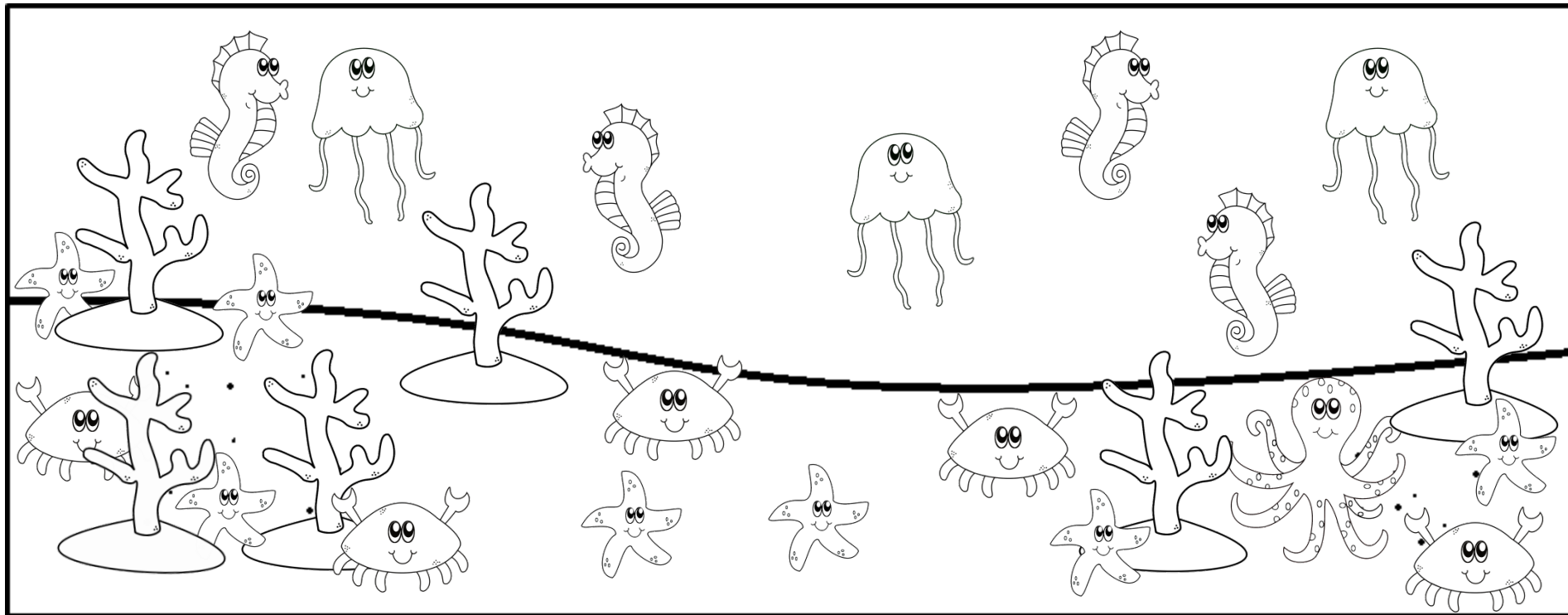


Terms of Use: These printables are provided *FREE* of charge. Please do share the web pages to my printables. Remember that all of my printables are for personal use. You cannot claim these printables or sell them as your own. All the printables are the property of JDaniel4sMom.com







Name: _____

Find and Count Ocean Activity

Count how many of each object you find in the picture below. Then write the number you find in the boxes below.



I can see.



	<input type="text"/>		<input type="text"/>		<input type="text"/>		<input type="text"/>		<input type="text"/>		<input type="text"/>
---	----------------------	---	----------------------	---	----------------------	--	----------------------	---	----------------------	---	----------------------

Name: _____

Find and Count Graphing Activity

Fill in one box above each ocean object to match the number you found on the Find and Count Page.


6					
5					
4					
3					
2					
1					









Name: _____

Find and Count Ocean Activity

Count how many of each object you find in the picture below. Then write the number you find in the boxes below.



I can see.




	<input type="text"/>		<input type="text"/>		<input type="text"/>		<input type="text"/>		<input type="text"/>		<input type="text"/>
---	----------------------	---	----------------------	---	----------------------	---	----------------------	---	----------------------	---	----------------------

Name: _____

Find and Count Graphing Activity

Fill in one box above each ocean object to match the number you found on the Find and Count Page.


6					
5					
4					
3					
2					
1					









Name: _____

Find and Count Ocean Activity

Count how many of each object you find in the picture below. Then write the number you find in the boxes below.



I can see.




	<input type="text"/>		<input type="text"/>		<input type="text"/>		<input type="text"/>		<input type="text"/>		<input type="text"/>
---	----------------------	---	----------------------	---	----------------------	---	----------------------	---	----------------------	---	----------------------

Name: _____

Find and Count Graphing Activity

Fill in one box above each ocean object to match the number you found on the Find and Count Page.

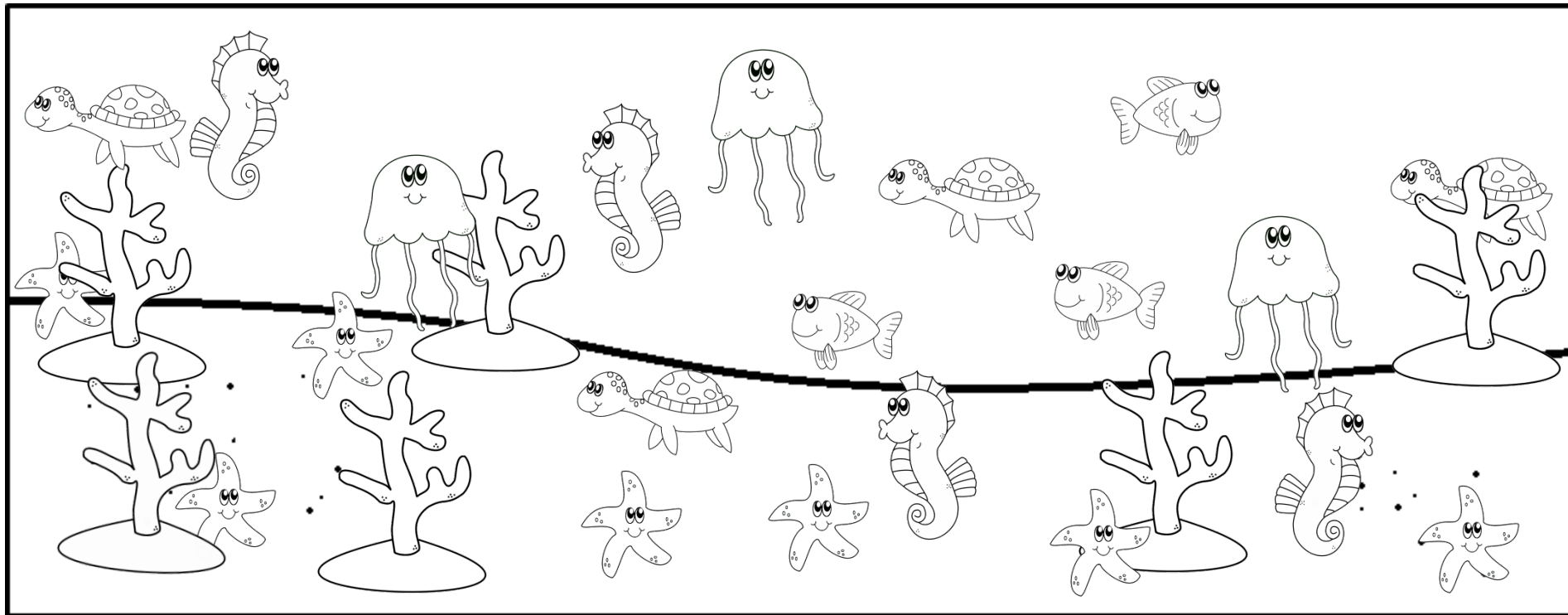
6					
5					
4					
3					
2					
1					









Name: _____

Find and Count Ocean Activity

Count how many of each object you find in the picture below. Then write the number you find in the boxes below.



I can see.

	<input data-bbox="338 1185 434 1320" type="text"/>		<input data-bbox="608 1185 705 1320" type="text"/>		<input data-bbox="879 1185 975 1320" type="text"/>		<input data-bbox="1139 1178 1236 1320" type="text"/>		<input data-bbox="1458 1178 1555 1320" type="text"/>		<input data-bbox="1729 1185 1825 1320" type="text"/>
---	--	---	--	---	--	--	--	---	--	---	--

Name: _____

Find and Count Graphing Activity

Fill in one box above each ocean object to match the number you found on the Find and Count Page.

6					
5					
4					
3					
2					
1					

