

Graphing Christmas Cupcakes

Created by Deirdre Smith of JDaniel4's Mom






Clip Art from 

Name: _____

Count the Christmas Cupcakes

Directions: Count the cupcakes that are the same. Then graph how many of each cupcake you see.



5					
4					
3					
2					
1					
					

Created by JDaniel4sMom.com

Terms of Use: These printables are provided FREE of charge. Please do share the web pages to my printables. Remember that all of my printables are for personal use. You cannot claim these printables or sell them as your own. All the printables are the property of JDaniel4sMom.com






Terms of Use: These printables are provided FREE of charge. Please do share the web pages to my printables. Remember that all of my printables are for personal use. You cannot claim these printables or sell them as your own. All the printables are the property of JDaniel4sMom.com

Name: _____

Count the Christmas Cupcakes

Directions: Count the cupcakes that are the same. Then graph how many of each cupcake you see.

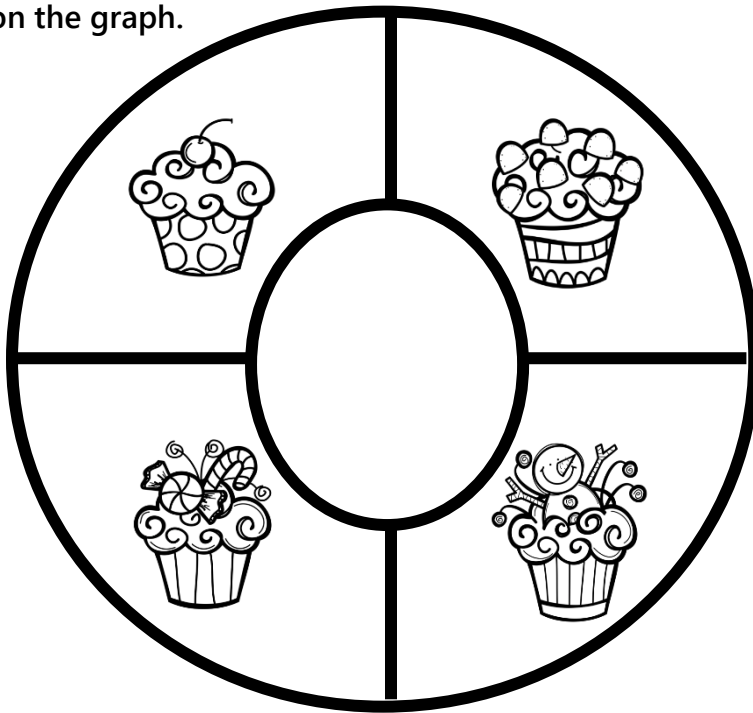


5					
4					
3					
2					
1					
					

Name: _____

Spin and Graph Christmas Cupcakes

Directions: Use a pencil and a paper clip as a spinner. Spin ten times. Record how many times you land on each cupcake on the graph.



5				
4				
3				
2				
1				
	