


Frog Number Spin

Addition to Ten

Created by Deirdre Smith of JDaniel4's Mom

Clip Art from 




Terms of Use: These printables are provided *FREE* of charge. Please do share the web pages to my printables. Remember that all of my printables are for personal use. You cannot claim these printables or sell them as your own. All the printables are the property of JDaniel4sMom.com

Name: _____

Frog Number Spin Addition

Use a paper clip and a pencil as a spinner. Spin the paper clip 2 times. Use the two numbers to landed on to create a math problem. Then solve the problem.

| | | | |
|---|---|---|---|
| $\begin{array}{r} ______ \\ + ______ \\ \hline \end{array}$ | $\begin{array}{r} ______ \\ + ______ \\ \hline \end{array}$ | $\begin{array}{r} ______ \\ + ______ \\ \hline \end{array}$ | $\begin{array}{r} ______ \\ + ______ \\ \hline \end{array}$ |
| $\begin{array}{r} ______ \\ + ______ \\ \hline \end{array}$ | $\begin{array}{r} ______ \\ + ______ \\ \hline \end{array}$ | $\begin{array}{r} ______ \\ + ______ \\ \hline \end{array}$ | $\begin{array}{r} ______ \\ + ______ \\ \hline \end{array}$ |
| $\begin{array}{r} ______ \\ + ______ \\ \hline \end{array}$ | $\begin{array}{r} ______ \\ + ______ \\ \hline \end{array}$ | $\begin{array}{r} ______ \\ + ______ \\ \hline \end{array}$ | $\begin{array}{r} ______ \\ + ______ \\ \hline \end{array}$ |



Name: _____


Frog Number Spin Addition

Use a paper clip and a pencil as a spinner. Spin the paper clip 2 times. Use the two numbers to landed on to create a math problem. Then solve the problem.

| | | | |
|--|--|--|--|
| $\begin{array}{r} \underline{\hspace{2cm}} \\ + \\ \underline{\hspace{2cm}} \end{array}$ | $\begin{array}{r} \underline{\hspace{2cm}} \\ + \\ \underline{\hspace{2cm}} \end{array}$ | $\begin{array}{r} \underline{\hspace{2cm}} \\ + \\ \underline{\hspace{2cm}} \end{array}$ | $\begin{array}{r} \underline{\hspace{2cm}} \\ + \\ \underline{\hspace{2cm}} \end{array}$ |
|--|--|--|--|

| | | | |
|--|--|--|--|
| $\begin{array}{r} \underline{\hspace{2cm}} \\ + \\ \underline{\hspace{2cm}} \end{array}$ | $\begin{array}{r} \underline{\hspace{2cm}} \\ + \\ \underline{\hspace{2cm}} \end{array}$ | $\begin{array}{r} \underline{\hspace{2cm}} \\ + \\ \underline{\hspace{2cm}} \end{array}$ | $\begin{array}{r} \underline{\hspace{2cm}} \\ + \\ \underline{\hspace{2cm}} \end{array}$ |
|--|--|--|--|

| | | | |
|--|--|--|--|
| $\begin{array}{r} \underline{\hspace{2cm}} \\ + \\ \underline{\hspace{2cm}} \end{array}$ | $\begin{array}{r} \underline{\hspace{2cm}} \\ + \\ \underline{\hspace{2cm}} \end{array}$ | $\begin{array}{r} \underline{\hspace{2cm}} \\ + \\ \underline{\hspace{2cm}} \end{array}$ | $\begin{array}{r} \underline{\hspace{2cm}} \\ + \\ \underline{\hspace{2cm}} \end{array}$ |
|--|--|--|--|



Name: _____

Frog Number Spin Addition

Use a paper clip and a pencil as a spinner. Spin the paper clip 2 times. Use the two numbers landed on to create a math problem. Then solve the problem.

| | | | |
|---|---|---|---|
| $\begin{array}{r} ______ \\ + ______ \\ \hline \end{array}$ | $\begin{array}{r} ______ \\ + ______ \\ \hline \end{array}$ | $\begin{array}{r} ______ \\ + ______ \\ \hline \end{array}$ | $\begin{array}{r} ______ \\ + ______ \\ \hline \end{array}$ |
| $\begin{array}{r} ______ \\ + ______ \\ \hline \end{array}$ | $\begin{array}{r} ______ \\ + ______ \\ \hline \end{array}$ | $\begin{array}{r} ______ \\ + ______ \\ \hline \end{array}$ | $\begin{array}{r} ______ \\ + ______ \\ \hline \end{array}$ |
| $\begin{array}{r} ______ \\ + ______ \\ \hline \end{array}$ | $\begin{array}{r} ______ \\ + ______ \\ \hline \end{array}$ | $\begin{array}{r} ______ \\ + ______ \\ \hline \end{array}$ | $\begin{array}{r} ______ \\ + ______ \\ \hline \end{array}$ |

